

Name: \_\_\_\_\_

Class: 4\_\_

Date: \_\_\_\_\_

Term 3

Chapter 14

1. Directions: Use the conversion chart to complete each table.

days (d)	weeks (wk)
	2

hours (h)	days (d)
	3

minutes (min)	seconds (s)
4	

years (y)	months (mo)
3	

Conversion Chart Units of Time	
1 minute (min)	= 60 seconds (s)
1 hour (h)	= 60 min
1 day (d)	= 24 h
1 week (wk)	= 7 d
1 year (y)	= 52 wk = 12 months (mo)

hours (h)	minutes (min)
3	

2. What is the **difference** between the greatest weight green bean weight and the lowest?

Weight of Green Beans	
$\frac{1}{4}$ kg	
$\frac{1}{2}$ kg	
$\frac{3}{4}$ kg	
1 kg	

3. Circle the most reasonable estimate for each item.



8 mm

30 mL

500 mL

8 cm

30 L

500 L

8 km




4. Use your ruler to measure the eraser below to the nearest centimeters.



5. Name 2 items in your home that weighs more than 1 L.

\_\_\_\_\_

1. Circle only one (1) answer for each picture.

	Circle the more reasonable estimate for the mass of each object	
	25 kilograms	25 grams
	315 kilograms	315 grams
	12 kilograms	12 grams

2. Directions: Use the conversion chart to complete each table.

5 kg = \_\_\_ g

13 m = \_\_\_ cm

\_\_\_\_\_

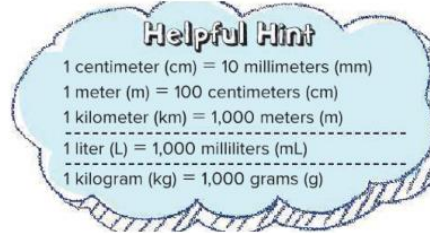
\_\_\_\_\_

\_\_\_ mm = 2 cm

9 L = \_\_\_ mL

\_\_\_\_\_

\_\_\_\_\_



21 km = \_\_\_ m

3. Convert to solve the problem.

One insect is 36 mm long. Another insect is 3 cm long. What is the **total** length of both insects in millimeters?

\_\_\_\_\_

4. Jamal has 17 fils. How many possible combinations of coins could he have? Use 1-fils, 5-fils and 10-fils coins to solve. Draw a picture to help you. Use the back of your paper.

5. Saeed stacked 19 kg of firewood on Saturday and 15 kg of firewood on Sunday. How many more grams of firewood did he stack on Saturday?

\_\_\_\_\_

### Chapter 15 Perimeter and Area

Directions: Find the perimeter and the area of each shape.

- 1.



Perimeter \_\_\_\_\_

Area \_\_\_\_\_



Perimeter \_\_\_\_\_

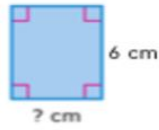
Area \_\_\_\_\_

2. Mr. Abdul is building a fence around his rectangular yard. It is 8 meters long and 13 meters wide. How many meters of fence will he need?

\_\_\_\_\_

3. Ms. Fatima is painting a wall in her new home. The wall is 9 meters tall and 4 meters wide. What is the area of the wall painted?

\_\_\_\_\_



What is the perimeter of the shape below?

\_\_\_\_\_

Chapter 16  $A = 30 \text{ cm}^2$

Classify each angle as acute, obtuse or right.

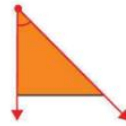
**Key Concept** Types of Angles

A **right angle** measures  $90^\circ$ .

An **acute angle** measures greater than  $0^\circ$  and less than  $90^\circ$ .

An **obtuse angle** measures greater than  $90^\circ$  but less than  $180^\circ$ .

This symbol means right angle.



\_\_\_\_\_

\_\_\_\_\_

\_\_\_\_\_

An angle that measures  $35^\circ$  is classified as \_\_\_\_\_.

An angle that measures  $125^\circ$  is classified as \_\_\_\_\_.

An angle that measures  $90^\circ$  is classified as \_\_\_\_\_.

Write the measure of each angle in degrees and as a fraction of a full turn.



\_\_\_\_\_ turn, \_\_\_\_\_ $^\circ$



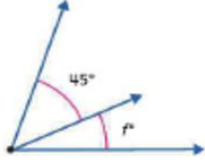
\_\_\_\_\_ turn, \_\_\_\_\_ $^\circ$



\_\_\_\_\_ turn, \_\_\_\_\_ $^\circ$

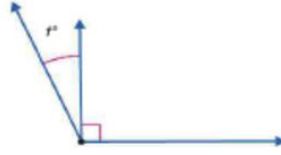
Find the unknown value.

The combined angle measure is  $70^\circ$ .



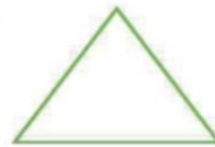
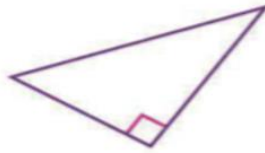

\_\_\_\_\_

The combined angle measure is  $115^\circ$ .



\_\_\_\_\_

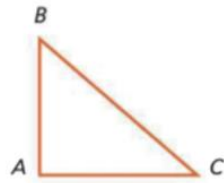
Classify the triangles as acute, obtuse or right.



\_\_\_\_\_

\_\_\_\_\_

\_\_\_\_\_



List the vertices. \_\_\_\_\_

List the line segments. \_\_\_\_\_

A **parallelogram** has opposite sides equal in length and parallel. In addition, opposite angles have the same size.



A **rhombus** has opposite sides equal in length and parallel. It has 4 equal sides.



A **rectangle** has opposite sides equal in length and parallel. It has 4 right angles.




A **square** has opposite sides equal in length and parallel. It has 4 right angles and 4 equal sides.



A **trapezoid** has exactly one pair of parallel sides.



Write the type of quadrilateral that best describes each shape.  
Choose the most specific term.



\_\_\_\_\_



\_\_\_\_\_



\_\_\_\_\_

### Chapter 17

Find the value of the coins.



\_\_\_\_\_



\_\_\_\_\_

An AED 5 banknote was used to buy each item. Determine the change.



\_\_\_\_\_



\_\_\_\_\_



\_\_\_\_\_