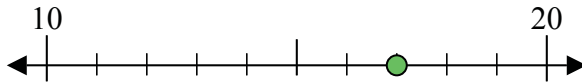


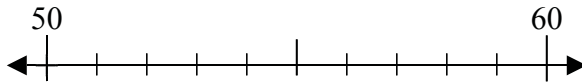


Use the numberlines to round each number to the nearest 10.

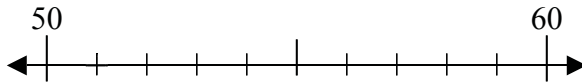
Ex) 17



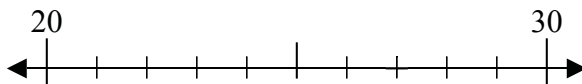
1) 50



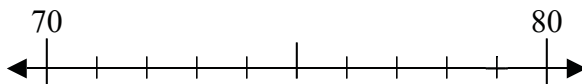
2) 51



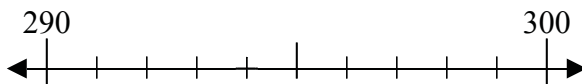
3) 27



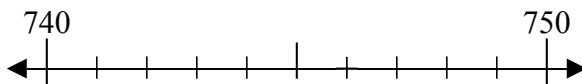
4) 79



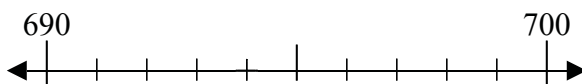
5) 294



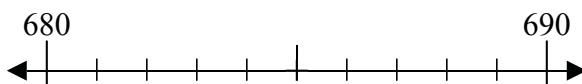
6) 746



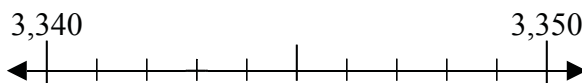
7) 694



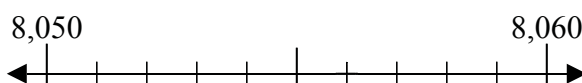
8) 685



9) 3,343



10) 8,056



Answers

Ex. 20

1. \_\_\_\_\_

2. \_\_\_\_\_

3. \_\_\_\_\_

4. \_\_\_\_\_

5. \_\_\_\_\_

6. \_\_\_\_\_

7. \_\_\_\_\_

8. \_\_\_\_\_

9. \_\_\_\_\_

10. \_\_\_\_\_



**Solve each problem.**

- 1) What digit is in the tens place in the number 43?
- 2) What digit is in the hundreds place in the number 197?
- 3) What digit is in the thousands place in the number 923,816?
- 4) What digit is in the ten thousands place in the number 5,836,794?
- 5) What digit is in the hundred thousands place in the number 4,153,672?
- 6) What digit is in the ones place in the number 8,531?
- 7) What digit is in the tens place in the number 2,358?
- 8) What digit is in the hundreds place in the number 8,672,139?
- 9) What digit is in the thousands place in the number 4,185?
- 10) What digit is in the ten thousands place in the number 4,685,213?
- 11) What place is the 9 at in the number 962,487?
- 12) What place is the 3 at in the number 52,173?
- 13) What place is the 1 at in the number 4,693,817?
- 14) What place is the 2 at in the number 93,256?
- 15) What place is the 5 at in the number 5,849?
- 16) What place is the 3 at in the number 731,942?
- 17) What place is the 2 at in the number 9,258,437?
- 18) What place is the 1 at in the number 54,681?
- 19) What place is the 3 at in the number 728,435?
- 20) What place is the 4 at in the number 473?

**Answers**

1. \_\_\_\_\_
2. \_\_\_\_\_
3. \_\_\_\_\_
4. \_\_\_\_\_
5. \_\_\_\_\_
6. \_\_\_\_\_
7. \_\_\_\_\_
8. \_\_\_\_\_
9. \_\_\_\_\_
10. \_\_\_\_\_
11. \_\_\_\_\_
12. \_\_\_\_\_
13. \_\_\_\_\_
14. \_\_\_\_\_
15. \_\_\_\_\_
16. \_\_\_\_\_
17. \_\_\_\_\_
18. \_\_\_\_\_
19. \_\_\_\_\_
20. \_\_\_\_\_



Solve each problem.

**Answers**

$$\begin{array}{r} 1) \quad 59 \\ - 23 \\ \hline \end{array}$$

$$\begin{array}{r} 2) \quad 94 \\ - 81 \\ \hline \end{array}$$

$$\begin{array}{r} 3) \quad 13 \\ - 2 \\ \hline \end{array}$$

$$\begin{array}{r} 4) \quad 87 \\ - 10 \\ \hline \end{array}$$

$$\begin{array}{r} 5) \quad 89 \\ - 53 \\ \hline \end{array}$$

$$\begin{array}{r} 6) \quad 64 \\ - 23 \\ \hline \end{array}$$

$$\begin{array}{r} 7) \quad 99 \\ - 4 \\ \hline \end{array}$$

$$\begin{array}{r} 8) \quad 53 \\ - 11 \\ \hline \end{array}$$

$$\begin{array}{r} 9) \quad 54 \\ - 30 \\ \hline \end{array}$$

$$\begin{array}{r} 10) \quad 47 \\ - 15 \\ \hline \end{array}$$

$$\begin{array}{r} 11) \quad 68 \\ - 40 \\ \hline \end{array}$$

$$\begin{array}{r} 12) \quad 74 \\ - 33 \\ \hline \end{array}$$

$$\begin{array}{r} 13) \quad 34 \\ - 3 \\ \hline \end{array}$$

$$\begin{array}{r} 14) \quad 85 \\ - 42 \\ \hline \end{array}$$

$$\begin{array}{r} 15) \quad 42 \\ - 21 \\ \hline \end{array}$$

$$\begin{array}{r} 16) \quad 58 \\ - 16 \\ \hline \end{array}$$

$$\begin{array}{r} 17) \quad 84 \\ - 72 \\ \hline \end{array}$$

$$\begin{array}{r} 18) \quad 35 \\ - 24 \\ \hline \end{array}$$

$$\begin{array}{r} 19) \quad 48 \\ - 32 \\ \hline \end{array}$$

$$\begin{array}{r} 20) \quad 15 \\ - 3 \\ \hline \end{array}$$

- 1. \_\_\_\_\_
- 2. \_\_\_\_\_
- 3. \_\_\_\_\_
- 4. \_\_\_\_\_
- 5. \_\_\_\_\_
- 6. \_\_\_\_\_
- 7. \_\_\_\_\_
- 8. \_\_\_\_\_
- 9. \_\_\_\_\_
- 10. \_\_\_\_\_
- 11. \_\_\_\_\_
- 12. \_\_\_\_\_
- 13. \_\_\_\_\_
- 14. \_\_\_\_\_
- 15. \_\_\_\_\_
- 16. \_\_\_\_\_
- 17. \_\_\_\_\_
- 18. \_\_\_\_\_
- 19. \_\_\_\_\_
- 20. \_\_\_\_\_