

1. What number is missing?


(3 marks)



- A. 25
- B. 30
- C. 50
- D. 60

2. How many fish?

(3 marks)



- A. 3
- B. 5
- C. 7
- D. 9

3. How many fingers are up?

(3 marks)

- A. 1
- B. 5
- C. 7
- D. 9



4. What is 2 as a word?

(3 marks)

- A. two
- B. six
- C. eight
- D. nine

5. What is seven as a numeral?

(5 marks)

6. What number comes next?

(5 marks)

6	7	8	9	_____
---	---	---	---	-------








7. There are  pencils.

(3 marks)

- A. 8
- B. 10
- C. 12
- D. 14



Use the timetable to for questions 5 and 6.

Sunday	Monday	Tuesday	Wednesday	Thursday	Friday	Saturday
						

8.


Today is...




(3 marks)

- A. Monday
- B. Wednesday
- C. Thursday
- D. Saturday

9.



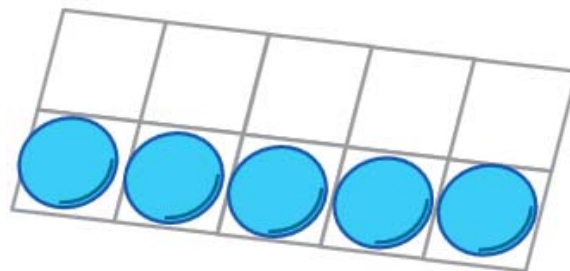
Today is \_\_\_\_\_.

(5 marks)

10. There are  counters.

(3 marks)


- A. 2
- B. 5
- C. 7
- D. 9



11. What number is missing?

(3 marks)


- A. 8
- B. 12
- C. 15
- D. 17



12. What number is missing?

(3 marks)

- A. 2
- B. 5
- C. 10
- D. 30



13. Write the numbers from smallest to largest.

(5 marks)

20, 14, 13, 18, 10

Smallest

Largest

14. How many groups of ten?

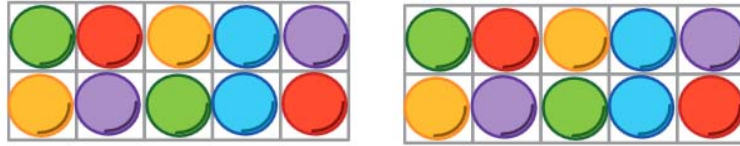
(3 marks)

A. 2

B. 5

C. 7

D. 9



15. Tell the time

(3 marks)



11 o'clock



o'clock


A. 1 o'clock

B. 2 o'clock

C. 3 o'clock

D. 4 o'clock

16. Which pencil is shorter? \_\_\_\_\_ (5 marks)



Green

Yellow

17. Circle morning.

(3 marks)



A.



B.



C.



D.

18. How many cubes are needed to measure the Key?

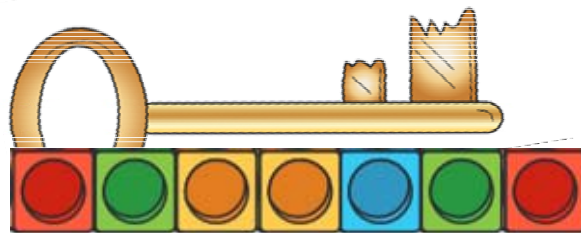
(3 marks)

A. 3

B. 6

C. 9

D. 12



19. The banana is  the mango.

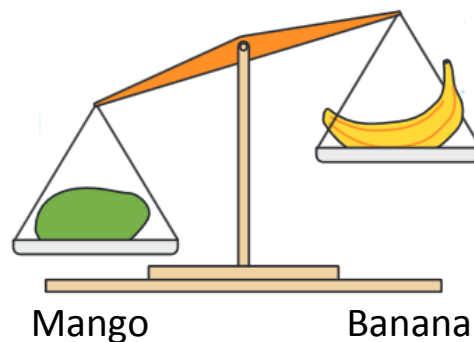
(3 marks)

A. heavier than

B. lighter than

C. the same as

D. equal to



20. 7 and  make 10.

(3 marks)

3 and  make 10.

A. 2

B. 3

C. 6

D. 7

21.  and  make 10.

(3 marks)

A. 2 and 2

B. 3 and 3

C. 4 and 6

D. 7 and 7

22. Fill in the missing number.

(5 marks)

$$8 = 4 + \text{$$

23. Fill in the missing number

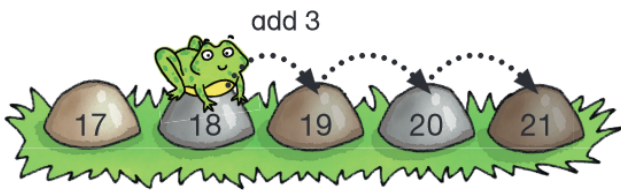
(3 marks)

- A. 4
- B. 7
- C. 9
- D. 12

$$5 + \square = 12$$

24.

(5 marks)



$$\square 18 + \square 3 = \square$$

25.

(3 marks)

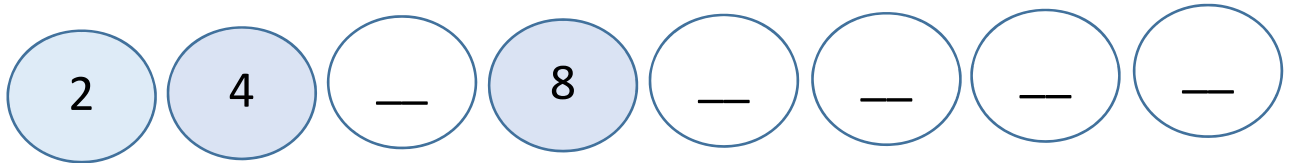
$$\square 9 - \square 4 = \square$$

- A. 3
- B. 5
- C. 7
- D. 10



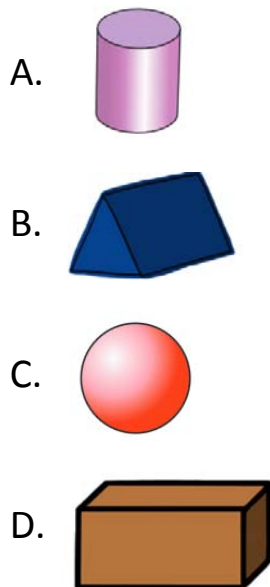
26. Count by 2.

(5 marks)



27. Circle the cylinder.

(3 marks)



28. 12 is  8

(3 marks)

- A. more than
- B. less than
- C. the same as
- D. equal to